

Ivy Education

Est. 2010

7+ English Exam Paper

18th September 2022

Paper 7.6 | 2022 Edition

Name:



Spend 45 minutes on this paper.

Spend 5 minutes reading the passage.

Spend 20 minutes on the Comprehension.

It is worth 25 marks

Spend 20 minutes on the Composition.

It is worth 25 marks

This paper includes 9 pages including front cover.

① Comprehension (25 marks)

Read this passage very carefully. Then answer the questions that follow.
Remember to answer in full sentences.

The Selfish Giant

Every afternoon as they were coming home from school, the children used to go and play in the Giant's garden. It was a large, lovely garden, with soft green grass. Here and there, over the grass stood beautiful red flowers shaped like stars, and there were twelve peach trees that in the spring time broke out into **delicate** blossoms of pink and pearl, and in the autumn grew rich fruit. The birds sat on the trees and sang so sweetly that the children used to stop their games in order to listen to them. 'How happy we are here!' they cried to each other. One day the giant came back. He had been to visit his friend the Cornish Ogre, and had stayed with him for seven years. After the seven years were over he had said all he had to say and he was determined to go back home and run his own castle.

When he arrived he saw the children playing in his garden. 'What are you doing here?' he cried in a very gruff voice, and the children ran away. 'My own garden is my own garden,' said the Giant. 'Anyone can understand that and I will allow nobody to play in it but myself.' So he built a high wall all round it, and put up a notice: TRESPASSERS WILL BE EATEN. He was a very **selfish** Giant.

From The Selfish Giant by Oscar Wilde

7. Why did the children run away? (2 marks)

8. What does the word trespassers mean? (2 marks)

9. How did the giant make sure that the children could not come into the garden. (3 marks)

10. Do you think that the giant was selfish? Explain using information from the passage. (4 marks)

① Composition (25 marks)

Spend 20 minutes on the composition – it is worth 25 marks.

Complete ONE of the following writing tasks.

Remember to include lots of interesting and creative vocabulary and don't forget to use paragraphs and punctuation.

1. Continue the story, describing what happens after the children run away and the giant is alone in his garden.

Remember to:

- Continue with a similar style and characters as much as possible.
- Make your story interesting and descriptive.


Or...

2. Write a short story entitled 'The Magic Garden'.

Remember to:

- Use paragraphs and an effective structure.
- Use a range of senses and descriptive language.

Question number:



Ivy Education

Est. 2010

7+ Maths Exam Paper

18th September 2022

Paper 7.6 | 2022 Edition

Name:



Spend 45 minutes on this paper.

It is worth 80 marks

This paper includes 13 pages including front cover.

1. Fill in the missing numbers. You may use the space on the right to show your workings if you wish. (1 mark each)

Example: $2 \times \underline{8} = 16$

a. $4 + 7 = \underline{\hspace{2cm}} + 5$

b. $9 \times 6 = \underline{\hspace{2cm}}$

c. 21 divided by 3 = $\underline{\hspace{2cm}}$

d. $\underline{\hspace{2cm}} \times 8 = 48$

e. $0 \times 7 = \underline{\hspace{2cm}}$

f. 32 divided by $\underline{\hspace{2cm}} = 4$

g. $7 + 34 + 4 = \underline{\hspace{2cm}}$
























h. $90 - 52 = \underline{\hspace{2cm}}$

i. $64 + 9 = \underline{\hspace{2cm}}$

j. $39 + 43 = \underline{\hspace{2cm}}$

8. The pictogram below shows how many hours of sunshine there were in each month.

Each  is worth 2 days

May	   
June	  
July	     
August	    
September	    

- a. How many days of sunshine were there in July? (1 mark)

.....

- b. In which two months does the sun shine for less than 10 days? (2 marks)

..... and

- c. How many more days of sunshine were there in September than in June? (2 marks)

.....

16. Rotate each of the shapes below a half turn clockwise. Draw the new shape in the space provided. *(1 mark for each)*

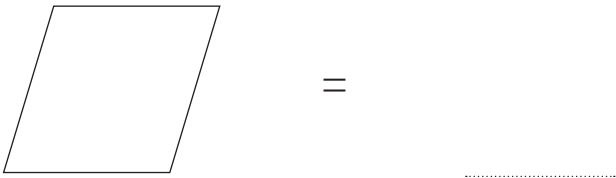
EXAMPLE:



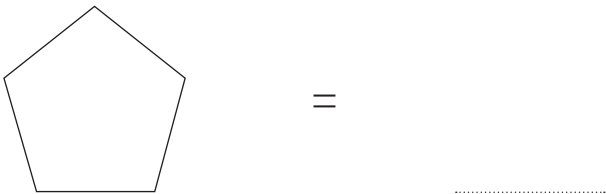
a.



b.



c.



17. Complete the following number sequences. *(1 mark each)*

a. 50 45 40 35 30

b. 15 20 25 30 35

c. 22 24 26 28 30

- 23.** Jasmine is reading a new book. She reads 6 pages every day in September.
How many pages did she read in September in total? (3 marks)

.....

- 24.** In a school, there are 23 children in each of the two Year 6 classes.

If every child in Year 6 brings £2 to donate to charity, how much in total will
be donated? (2 marks)

.....

END OF PAPER



Ivy Education

Est. 2010

7+ Reasoning Exam Paper

18th September 2022

Paper 7.6 | 2022 Edition

Name:



Spend 45 minutes on this paper.

It is worth 45 marks

This paper contains 45 questions. Each question is worth one mark. You have 45 minutes to complete the paper. Answer as many questions as you can.

This paper includes 11 pages including front cover.

In these questions, one letter can be moved from the first word to the second word to make two new words. All the other letters must remain in the same order and both new words must make sense.

Find the letter that moves and write the two new words on the lines provided. (1 mark each)

EXAMPLE: cart fog → cat frog

1. pace ray →

2. hate sip →

3. clone lap →

4. play sit →

5. chair hat →

6. star car →

7. plain ace →

Each question below contains three pairs of words. Find the word that completes the third pair in the same way as the other two pairs and write it on the line provided (1 mark each).

EXAMPLE: shop → hop drip → rip ship → **hip**

13. cram → ram stop → top trip →

14. shade → had dinky → ink stand →

15. part → pat sand → sad coot →

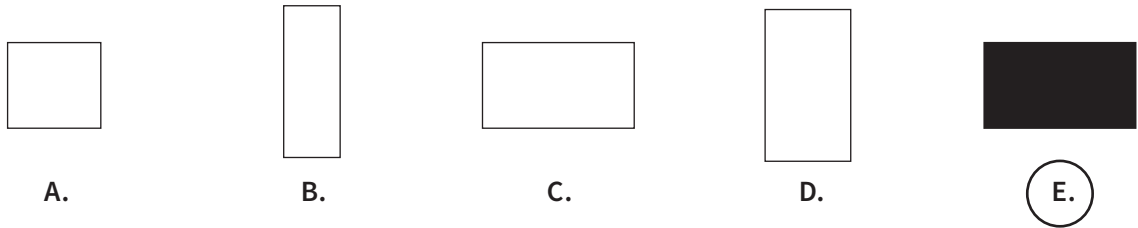
16. tray → try pain → pan east →

17. rate → rat cone → con seal →

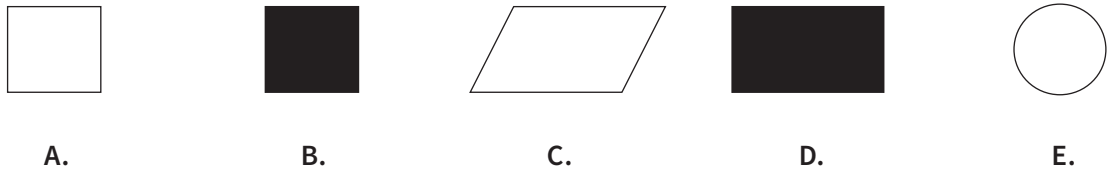
18. plod → pod stun → sun plan →

One of the figures in each row does not belong with the others.
 Circle the letter below the figure that is the odd one out (1 mark each).


EXAMPLE:



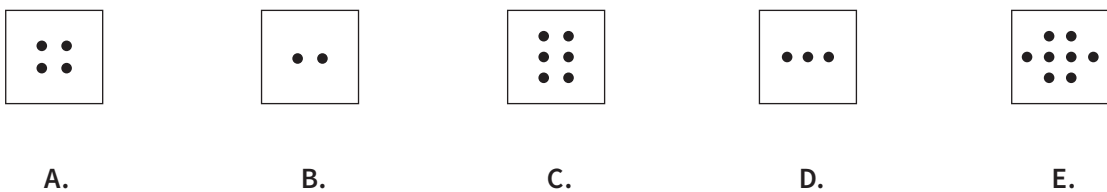
31.



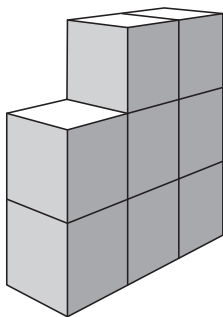
32.



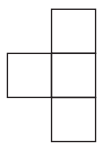
33.




43.




A.



B.

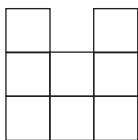
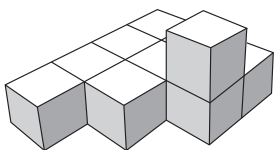


C.

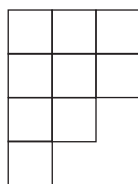


D.

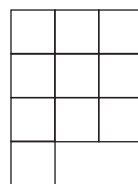
44.



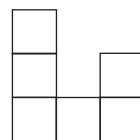
A.



B.

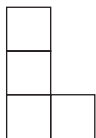
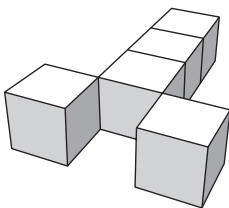


C.

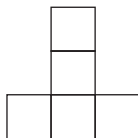


D.

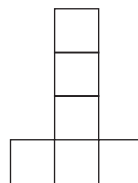
45.



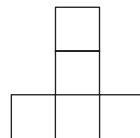
A.



B.



C.



D.

END OF PAPER